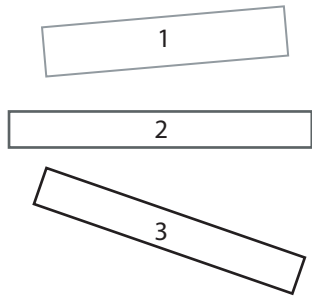
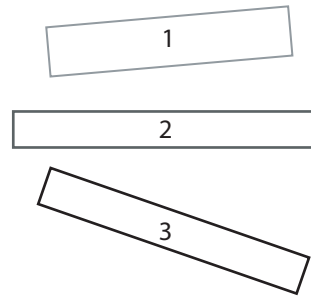


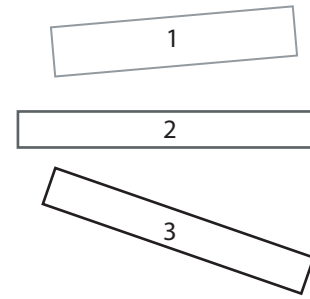
1 Laquelle de ces bandes mesure exactement 3 cm et 6 mm de longueur ?



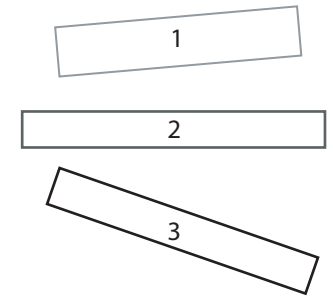
1 Laquelle de ces bandes mesure exactement 3 cm et 6 mm de longueur ?



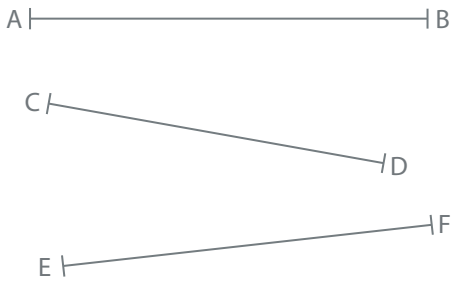
1 Laquelle de ces bandes mesure exactement 3 cm et 6 mm de longueur ?



1 Laquelle de ces bandes mesure exactement 3 cm et 6 mm de longueur ?



2 Indique la mesure de chacun de ces segments.



[AB] = cm et mm.

[AB] = mm.

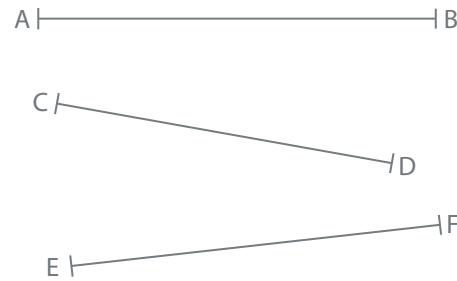
[CD] = cm et mm.

[CD] = mm.

[EF] = cm et mm.

[EF] = mm.

2 Indique la mesure de chacun de ces segments.



[AB] = cm et mm.

[AB] = mm.

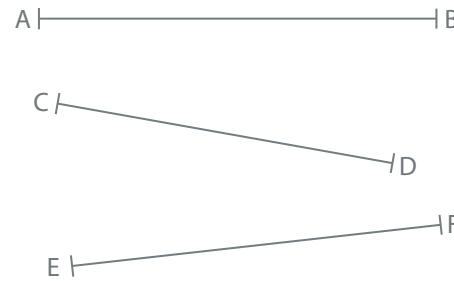
[CD] = cm et mm.

[CD] = mm.

[EF] = cm et mm.

[EF] = mm.

2 Indique la mesure de chacun de ces segments.



[AB] = cm et mm.

[AB] = mm.

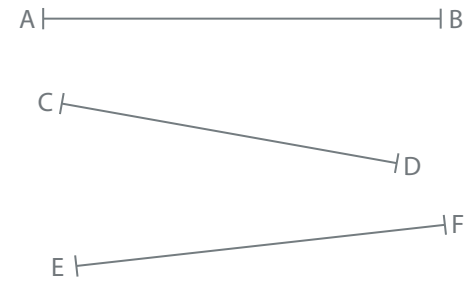
[CD] = cm et mm.

[CD] = mm.

[EF] = cm et mm.

[EF] = mm.

2 Indique la mesure de chacun de ces segments.



[AB] = cm et mm.

[AB] = mm.

[CD] = cm et mm.

[CD] = mm.

[EF] = cm et mm.

[EF] = mm.